











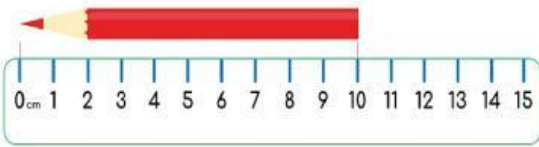





ENGLISH MATH GRADE 1









Con ấn vào từng ảnh để nghe và phát âm theo nhé.

| | | | |
|---|-------------------------------|--|----------------------------|
|  | Circle Hình tròn |  | Greater than Lớn hơn |
|  | Triangle Hình tam giác |  | Equal to Bằng |
|  | Square Hình vuông |  | Less than Nhỏ hơn |
|  | Rectangle Hình chữ nhật |  | Long Dài |
|   <div>BIG</div> <div>SMALL</div> | |  | Short Ngắn |

Exercise 1: Choose the correct answer. (Chọn đáp án đúng)

| | |
|---|--|
|  | <p>1. How long is the pencil? (Chiếc bút chì dài bao nhiêu?)</p> <p>A. The pencil is four cm long. B. The pencil is five cm long. C. The pencil is six cm long.</p> |
|  | <p>2. How long is the pencil?</p> <p>A. 6 cm B. 10 cm C. 10 m</p> |
|  | <p>3. Ten is greater/less than five.</p> |
|  | <p>4. Two is greater/less than six.</p> |
|  | <p>5. Which animal is bigger?</p> <p>A. Elephant B. Mouse C. Rabbit</p> |

Exercise 2. Listen, look and write.

| | | | |
|---|---|---|---|
|  _quare |  C_rcle |  L_ss than |  _qual to |
|  On_ |  S_x |  T_ree |  P_us |

The end