

INSPIRED TOTS EARLY LEARNING CENTER

SECOND TERM EXAMINATION, 2025.

NAME: _____

Multiple Choice. Select your best answer.

1. ___ is all around us and we cannot see it.

- a. Air b. Water c. Clouds

2. Does air have color and odor?

- a. Yes, it has. B. No, it doesn't

3. Which of the following gas is made up of mostly in the air?

- a. Oxygen b. Nitrogen c. Argon

4. Which of the following gas do plants need in order to make their own food?

- a. Nitrogen b. Carbon dioxide
c. Oxygen

5. What is air pollution?

a. Air pollution is the release of pollutants into the air.

b. Air pollution is the virus transmit to humans such as COVID.

c. Air pollution makes the water dirty.

6. Which of the following is an example of air pollutant?

- a. Smoke b. Plants c. Acid rain

7. Which of the following is NOT a cause of air pollution?

- a. Forest fires b. Volcanic eruption

- c. Soot d. acid rain

8. Which of the following releases harmful gases in the air?

- a. hydroelectric power station



- b. burning of fossil fuels



- c. electric cars



9. Why do farmers often cut down and burn trees?

- a. to make land for farming.

- b. to make land into sea.

- c. to make land into acid.

10. Which of the following is the effect of the air pollution?

- a. Soot b. acid rain c. smoke

11. ___ water is easier to transport.

- a. A cup of b. tank of c. packaged

INSPIRED TOTS EARLY LEARNING CENTER

SECOND TERM EXAMINATION, 2025.

NAME: _____

12. We can find the _____ on a safe packaged water.

a. name of manufacturer b. name of product c. names of people

13. The _____ registration number is an important feature of packaged water.

A. NDLEA b. NPF c. NAFDAC

14. Mention 4 uses of water

1 _____ 2 _____

3 _____ 4 _____

15. Water is _____ in nature.

a. solid b. liquid c. gas

16. Water is useful to plants and animals.

a. true false c. maybe

17. Drinking dirty water can cause _____

a. cough b. fever c. cholera

18. Clean water makes us _____

a. healthy b. sick c. weak

19. Photosynthesis is how plants make their own _____.

a. water b. food c. oxygen

20. Plants use energy from the _____ to make food.

a. moon b. sun c. electricity

21. Plants give off _____ which animals and people breathe in.

a. carbon dioxide b. nitrogen c. oxygen

22. What part of the plant is responsible for making food through the process of photosynthesis?

a. roots b. stem c. leaves

INSPIRED TOTS EARLY LEARNING CENTER

SECOND TERM EXAMINATION, 2025.

NAME: _____

23. The flower is the part of the plant that grows _____.

- a. seeds b. leaves c. stem

24. What is germination?

- a. when a flower is pollinated b. when a seed begins to grow
c. when the pollen meets the egg

25. A _____ is a structure that can grow into a new plant.

- a. leaf b. flower c. seed

Using the words in the box, fill in the blanks



How to Plant Seeds

Directions: Using the words in the box, fill in the blanks below.

sun water pot soil
seeds hole finger plant

Place some  into a .


Make a  with your .

Drop some  into the .

Cover the  with .

Pour  into the .

Give your  lots of .

Wait for your new  to grow!