



English private School of Kalba Science – Assessment B Revision pack

Name: _____

Grade 3/ year 4: _____

Teachers: Ms. Farah Irfan, Ms. Shonima

Best of luck!

UNIT 1 – PLANTS

Q1. Match the following parts to their functions:



* Produces fruits and seeds.

* Takes in water and minerals from the soil.

* Makes food for the plant.

* Carries water and minerals to different parts of the plant.

Q2. Give one-word answers:

a. Name the part of the plant which takes in water from the soil: _____

b. Name the part of the plant which carries water to different parts: _____

c. In which part of the plant is food made? _____

d. What two things do plant roots take from the soil?

e. Name the part of the plant which produces fruits and seeds: _____

Q3. Colour the things that plant needs to grow and be healthy:

Air

Television

Water

Sandwich


School

Soil

Ice cream

Light

Q4. Label the parts of the plant correctly:



Q 5. Write whether the leaves below are simple or compound.













Q6. Label the leaves below using these words - Serrated edges entire lobed



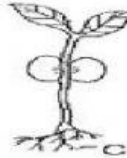


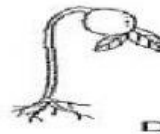


Q7 . Look at the seed germination stages below, Number the stages in order – 1, 2, 3 and 4.

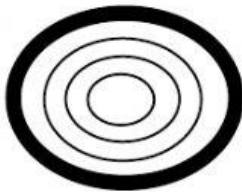










Q 8. Look at the stems below and write the age of the trees.



_____ years



_____ years



_____ years