

# MONEY 2

Solve each exercise on a piece of paper and write the answers here:


Apple: 53 cents	Pack of strawberries: 84 cents
Banana: 41 cents	Box of peaches: 1.32€
Carrot: 59 cents	Pack of tomatoes: 78 cents
Pineapple: 1.52 €	

1. 


Total price = \_\_\_\_\_ cents

2. 


Total price = \_\_\_\_\_ € \_\_\_\_\_ cents

3. 


Total price = \_\_\_\_\_ € \_\_\_\_\_ cents

4. 

Total price = \_\_\_\_\_ € \_\_\_\_\_ cents

5. 

Total price = \_\_\_\_\_ € \_\_\_\_\_ cents

6. 

Total price = \_\_\_\_\_ € \_\_\_\_\_ cents