


1- Melvin recorded the number of books he read from January to April.



Month	Tally	Number of books
January		6
February		4
March		
April		7

a. Complete the table.

b. How many books did he read in March?

_____ books




c. How many more books did he read in April than in February?

_____ books

d. How many books did he read from January to April?

_____ books

- 2- The favourite colour of each pupil in class is recorded.
The pictogram shows the results.

Blue	
Green	
Red	
Yellow	

- (a) How many pupils like green?

_____ pupils

- (b) How many pupils like blue or red?

_____ pupils

- (c) How many pupils are there in the class altogether?

_____ pupils

- (d) Which is the most popular colour?

- (e) Which is the least popular colour?
