

My name is: _____

WORKSHEET


Date: 13/02/2025
PPD-A4




Teacher's feedbacks

Task 1: Listen and match. (Nghe và chọn nhé.)


1. It's a circle.







3. It's a square.



2. It's a triangle.



4. It's a rectangle.



©2020 LWS

Task 2: Listen and tick.
(Con nghe và đánh dấu nhé.)



1. How many sides does the triangle have?
The triangle has 3 sides.



2 sides

☐

3 sides

☐

2. How many sides does the rectangle have?
The rectangle has 2 long sides and 2 short sides



2 long sides and 3
short sides

☐

2 long sides and 2
short sides

☐

3. How many sides does the square have?
The square has 4 equal sides.



4 equal sides

☐

5 equal sides

☐

4. How many sides does the circle have?
The circle has no sides.



1 side

☐

No sides

☐