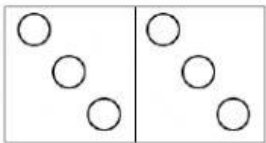
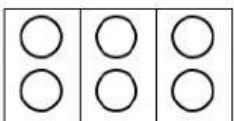
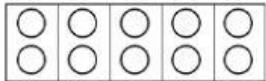


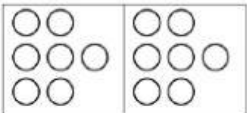
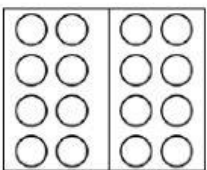



Name: _____

Prepare for “2 as a Factor”

Tick (v) if the model is correct. Write the repeated addition.

Then find the product.

Model		Repeated addition	Multiplication
 <input type="checkbox"/>	 <input checked="" type="checkbox"/>	$2 + 2 + 2 = 6$	$2 \times 3 = 6$
 <input type="checkbox"/>	 <input type="checkbox"/>		$2 \times 5 = \underline{\quad}$
 <input type="checkbox"/>	 <input type="checkbox"/>		$2 \times 7 = \underline{\quad}$
 <input type="checkbox"/>	 <input type="checkbox"/>		$2 \times 8 = \underline{\quad}$