



Tick living things



Put the name of the three Vital Function:



Put the name of the parts of the plant which correspond

water

leaves

roots

sunlight

Photosynthesis

Through the they absorb water and mineral salts from the soil.




Through the , they obtain: sunlight and carbon dioxide from the air.

Plants use energy from the to make food from the , mineral salts and carbon dioxide.

is a process in which plants make their own nutrients so they can grow and develop.




Write the name of the three types of plants and answer the questions

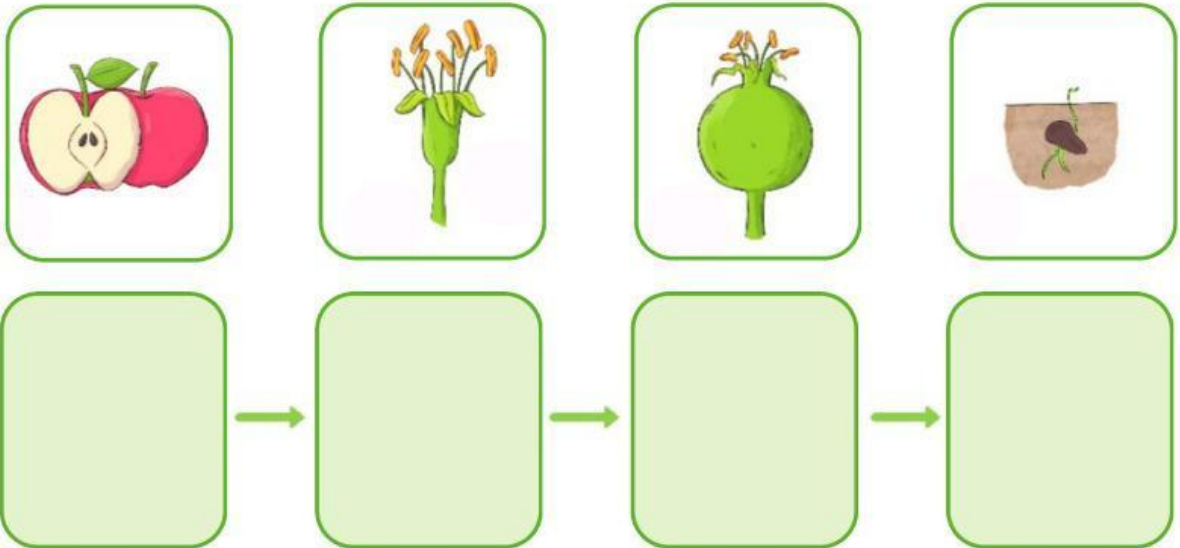




Write the parts of the plants:



Choose the correct order



Drag and drop

stamen anther stigma pistil filament
petal sepal ovary style

