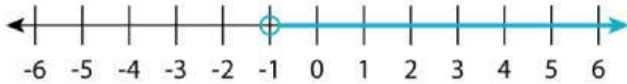


Name : _____

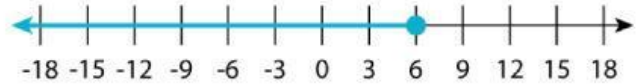
Score : _____ Date : _____

Number Line Writing Inequalities

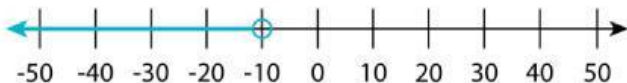
Write the inequalities using the given number lines.



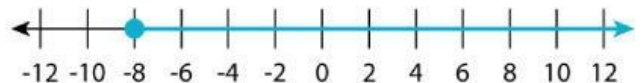
Inequality: _____



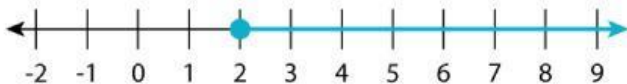
Inequality: _____



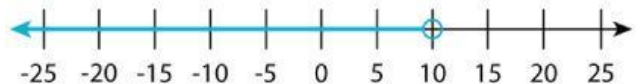
Inequality: _____



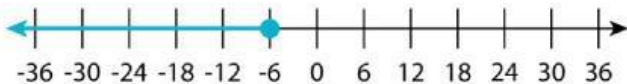
Inequality: _____



Inequality: _____



Inequality: _____



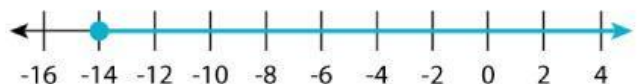
Inequality: _____



Inequality: _____



Inequality: _____



Inequality: _____