








**UNIDAD EDUCATIVA PARTICULAR BILINGÜE**  
**"CARDENAL SPELLMAN"**  
**FOURTH GRADE**  
**TELLING THE TIME**



A) Look at the analogue clocks and write the number of the correct answer.

	<ol style="list-style-type: none"><li>1. It is half past four.</li><li>2. It is three past six.</li><li>3. It is half past three</li></ol>
	<ol style="list-style-type: none"><li>1. It is a quarter to seven.</li><li>2. It is a quarter past seven.</li><li>3. It is three past seven.</li></ol>
	<ol style="list-style-type: none"><li>1. It is three to ten.</li><li>2. It is ten past ten.</li><li>3. It is ten to three.</li></ol>
	<ol style="list-style-type: none"><li>1. It is twenty five to nine.</li><li>2. It is twenty five past eight.</li><li>3. It is twenty five to eleven.</li></ol>
	<ol style="list-style-type: none"><li>1. It is a quarter past two.</li><li>2. It is a quarter to two.</li><li>3. It is ten past nine.</li></ol>





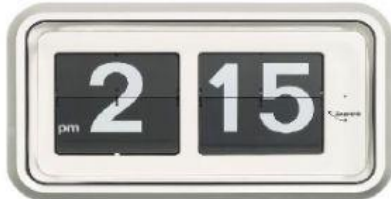
Instituto Figlie di Maria Ausiliatrice  
selezione di Don Bosco  
Inspección Sagrado Corazón - ECU  
Quito - Ecuador



## UNIDAD EDUCATIVA PARTICULAR BILINGÜE "CARDENAL SPELLMAN"



B) Look at the digital clocks and write the time.



WE LEARN

