



# APLICANDO ECUACIONES

1. Remarca las expresiones que representan una ecuación. 1 punto cada una

$$m + 5$$

$$45y$$

$$a + b = c$$

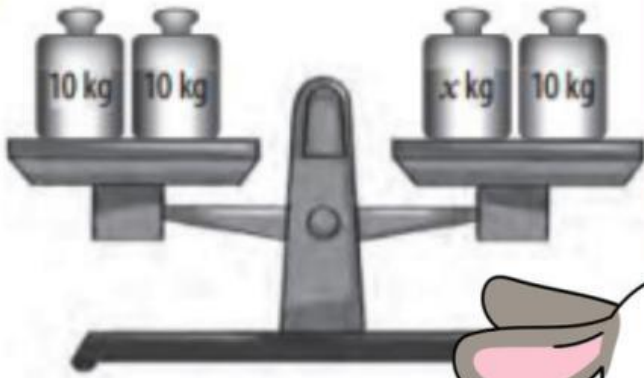
$$3 + x = 10$$

$$3z + 65 = 437$$

$$3 + 24 = 27$$

## ¿QUÉ ECUACIÓN REPRESENTA A LA IMAGEN?

a.

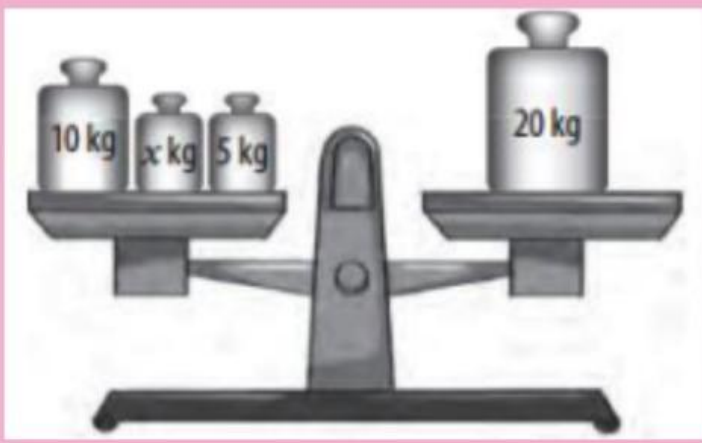


$$10 + 10 = X + 10$$

$$20 + 10 = 10X$$

$$20 = 10X$$





$$15X = 20$$

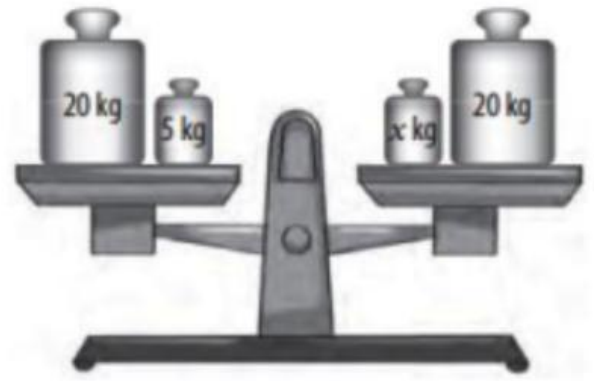
$$15X = 20X$$

$$10 + X + 5 = 20$$





c.



$$25 = 20X$$

$$20 + 5 = 20X$$

$$20 + 5 = X + 20$$

 LIVEWORKSHEETS