


# Line of Symmetry

Draw the line of symmetry for each shape. Write how many.

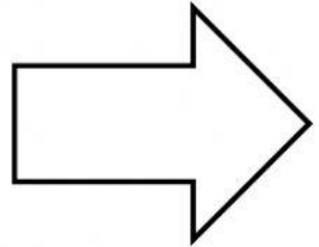
A.



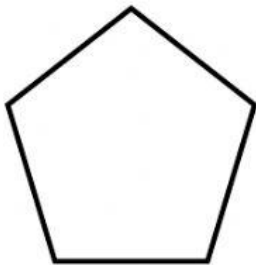
B.



C.



D.




E.



F.



G.



H.



I.

