


Tell if the minute hand is past the hour or going to the next hour


1.



**past the hour**

going **to** the next hour


2.



**past the hour**

going **to** the next hour


3.



**past the hour**

going **to** the next hour


4.



**past the hour**

going **to** the next hour


5.



**past the hour**

going **to** the next hour

6.



**past the hour**

going **to** the next hour