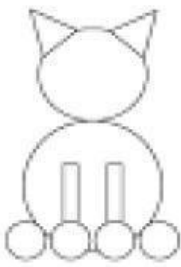


## 2D and 3D shapes

Full name: .....

### 1/ How many 2D shapes are there? Write in numbers:

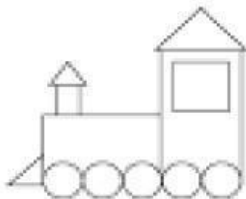


How many circles are there? .....

How many triangles are there? .....

How many rectangles are there? .....

How many squares are there? .....

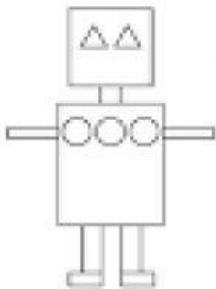


How many squares are there? .....

How many circles are there? .....

How many triangles are there? .....

How many rectangles are there? .....



How many circles are there? .....

How many squares are there? .....

How many triangles are there? .....

### 2/ Write the names of 3D shapes under the pictures:

Choose from these: cube, cuboid, sphere, cylinder, cone



.....



.....