


















Count the objects in each set. Compare using $>$, $<$, or $=$ as appropriate.

1)   

2)   

What comes before, after and between.

BEFORE	BETWEEN	AFTER
		
		
		

Write the numbers in order from the smallest on the left to the largest.

279

379

290

621

487

189

426



Determine the place value of the underlined digit.

1. 1 = _____ 2. 7 = _____
3. 6 = _____ 4. 14 = _____