

There are 316 green chairs and 431 red chairs. Calculate the total numbers of chairs.

Number sentence:

The total numbers of chairs is

Maria buy 986 cupcakes. 451 cupcakes were given to the pupils. How many balance of cupcakes left?

Number sentence:

The balance of cupcakes is

There are 3 vans. Each van can carries 7 passengers. How many passengers are there altogether.

Number sentence:

x

=

The total numbers of passengers is

Mimi puts 14 apples equally in into 2 baskets. How many apples are there in each baskets?

Number sentence:

÷

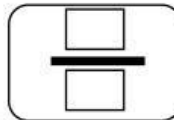
=

Each basket has apples.


Ali coloured 6 out of 10 part diagrams. Write the fraction of part that he coloured. State the answer in decimals.




Write the fraction of coloured parts.



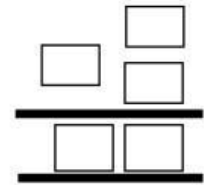
Calculate:



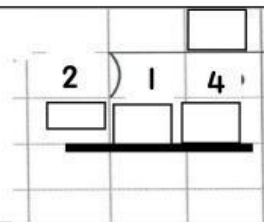
Calculate:



Calculate:



Calculate:



State the decimal of coloured parts.

