

INSPIRED TOTS EARLY LEARNING CENTER

FIRST TERM EXAMINATION, 2024.

NAME: _____ **DATE:** _____

**CREATIVE ARTS
GRADE**

2ND

Tick the correct answers from the options provided

1. The Earth is made up of water, rocks, soil and _____. a) Insects b) air c) clouds d) people
2. One of these collects energy from the sun. a) Windmill b) Solar panel c) Water dam d) Toaster
3. The Earth's greatest source of energy is the _____. a) Sun. b) Water c) wind d) People
4. What is the other word for an animal's natural home? a) House b) Habitat c) Land d) Tree
5. _____ is throwing trash on the ground. a) resource b) Littering c) Compost d) Leather
6. To protect our supply of something by using less or taking care of it is called _____. a) Conservation b) Pollution c) Globalization d) Reuse
7. Most living organisms need _____ to breathe. a) Nitrogen b) Oxygen c) Carbon monoxide d) None of these
8. How do stems help plants meet their basic needs? a) Carrying water and nutrients from the roots to the leaves b) Hold the plant in the ground c) Have root d) Have tap roots

9. Most plants grow in _____. a) water b) homes c) sunlight d) soil
10. Which of the following is a flower? a) Mango b) Mint c) Hibiscus d) Mango
11. Fruits develop from _____. a) Leaves b) Flowers c) Seeds d) Stem

Answer true or false

12. Soil is not an important component of the environment. **True/ false**
13. The environment consists of vegetation, water and soil. **True/ false**

Look at the pictures below, write the correct word in each box.

Living things	Nonliving things



tree



flag



worm



dog



clock



boy



cloud



butterfly



kite



ball



flower



cupcake

14. Parallel lines never _____. a) intersect b) end c) stay straight d) exist
15. Which of the following shapes does not have parallel lines? a) circle b) square c) cube d) rectangle

16. What is the name of this type of line -----? a) broken line b) continuous line c) diagonal line d) implied line

17. What type of line appears still and laying down? a) zig zag b) diagonal line c) vertical d) horizontal

18. Which of these is the value needed in creative art? a) drawing b) shouting c) carnival d) creativity

19. Which of these shapes is a 3 dimensional shape? a) diagonal b) oval c) cylinder d) none of the above

Fill in the blanks with the correct answers.

20. How do you care for the environment? Give 2 ways. .

1. _____

2. _____

21. Write down 3 things that plants, animals and people need to survive.

_____, _____ and _____

22. What will happen to a plant if all its flowers are removed from it? _____

23. Describe 3 uses of flowering plants to you.

24. Mention 5 objects you love to mold using clay.

i. _____















ii. _____

iii. _____

iv. _____

v. _____

Write what shape each real life object is.

 cube	 pyramid	 cylinder
 cone	 sphere	 rectangular prism
		
		
		

25. Name the following lines.

