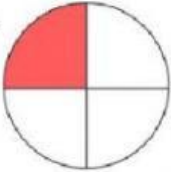

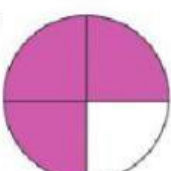



Fractions

What fraction does the colored area show?
Color in the bubble next to the correct answer.

1. 	<input type="radio"/> $\frac{1}{2}$	<input type="radio"/> $\frac{3}{4}$	<input type="radio"/> $\frac{1}{4}$	<input type="radio"/> $\frac{1}{3}$
2. 	<input type="radio"/> $\frac{2}{3}$	<input type="radio"/> $\frac{2}{4}$	<input type="radio"/> $\frac{1}{4}$	<input type="radio"/> $\frac{1}{2}$
3. 	<input type="radio"/> $\frac{3}{4}$	<input type="radio"/> $\frac{1}{2}$	<input type="radio"/> $\frac{2}{3}$	<input type="radio"/> $\frac{1}{3}$
4. 	<input type="radio"/> $\frac{2}{4}$	<input type="radio"/> $\frac{3}{4}$	<input type="radio"/> $\frac{1}{3}$	<input type="radio"/> $\frac{1}{4}$
5. 	<input type="radio"/> $\frac{3}{4}$	<input type="radio"/> $\frac{1}{3}$	<input type="radio"/> $\frac{2}{4}$	<input type="radio"/> $\frac{2}{3}$