

8

Label the diagram.

1 POINT

brain

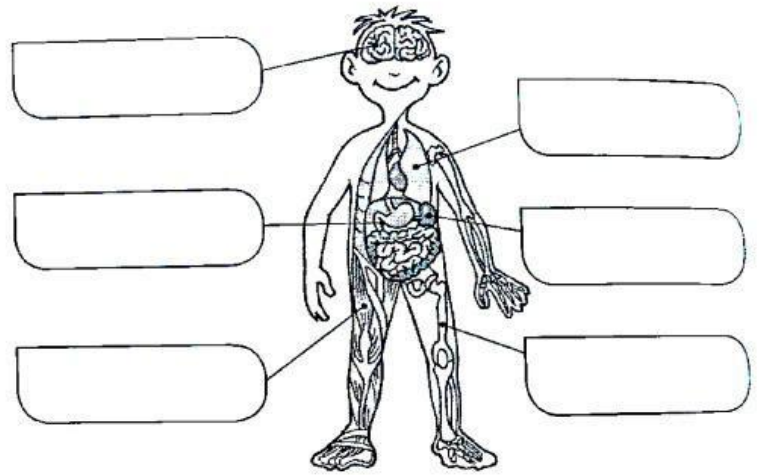
kidney

lung

bone

stomach

muscle



2nd PART: 5 POINTS

9

What life process is it? Write nutrition, sensitivity and reproduction.

1 POINT



- a)
- b)
- c)

10

Match to make sentences about healthy habits.

1 POINT

- a. We need to exercise
- b. We must eat
- c. We need to look after
- d. We need ten
- e. We must drink

- our backs.
- enough water.
- hours of sleep a night.
- regularly.
- a healthy and balanced diet.

11

Classify the words. 1 POINT

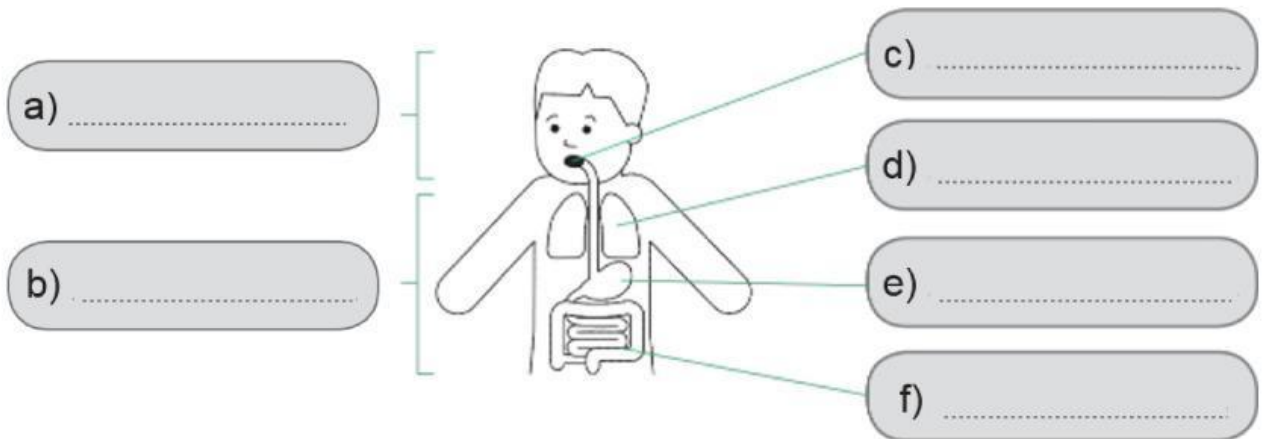
forehead – hand – leg – abdomen – foot – arm – thorax – back – face

- a. head ▶ _____
- b. trunk ▶ _____
- c. limbs ▶ _____

1 POINT

12

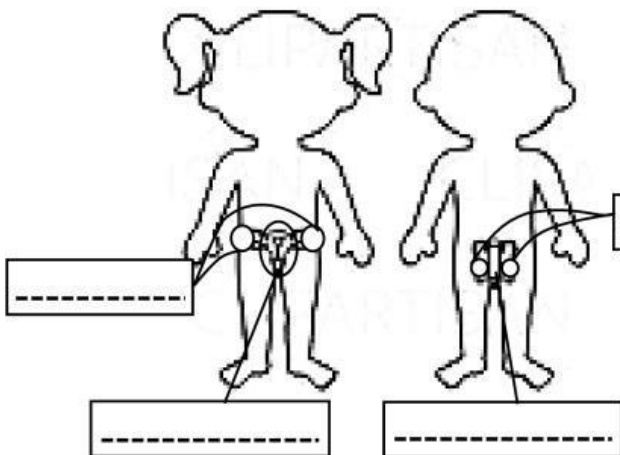
Label the organs of nutrition and the parts of the body involved in this life process: head, stomach, mouth, trunk, lung, intestine.



13

Write and label. 1 POINT

What are the parts of the male and female reproductive systems?



The female reproductive organs are the _____ and the _____

The male reproductive organs are the _____ and the _____