

Nama:

Kelas:

# Lembar Kerja Peserta Didik

# MATEMATIKA

MATERI PECAHAN

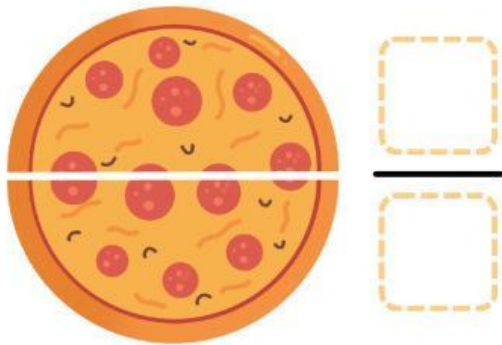




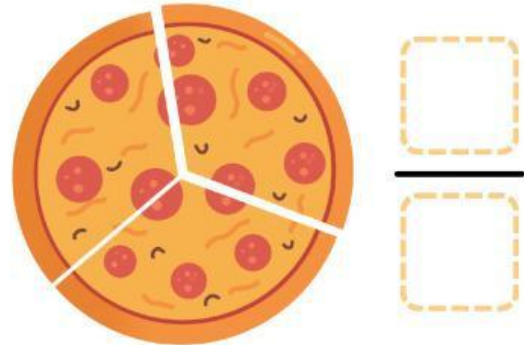
# Menentukan Pecahan

Tentukan nilai pecahan dari setiap bagian pizza.

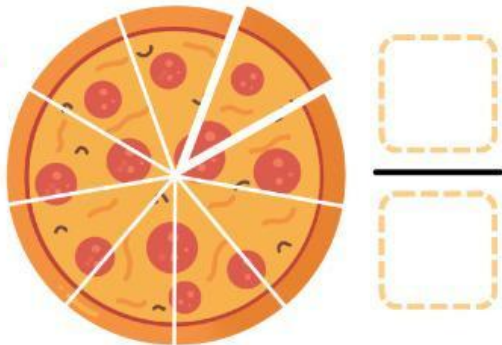
1.




2.



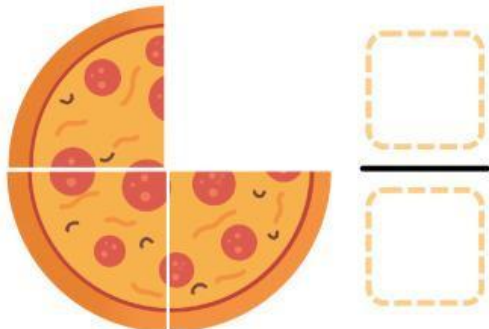
3.



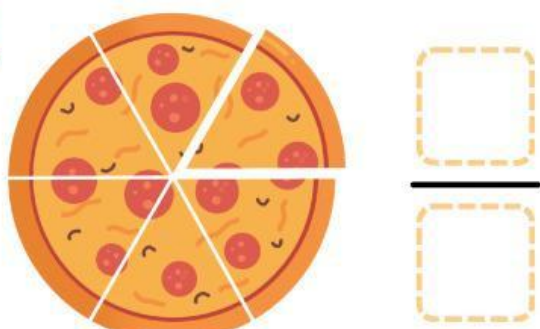
4.



5.




6.



# Perbandingan Pecahan

Perhatikan arsiran pada lingkaran.  
Bandingkan dan pilihlah tanda  $<$ ,  $>$ , atau  $=$ .



$<$     $=$     $>$



$<$     $=$     $>$



$<$     $=$     $>$



$<$     $=$     $>$



$<$     $=$     $>$



$<$     $=$     $>$



$<$     $=$     $>$



$<$     $=$     $>$



$<$     $=$     $>$



$<$     $=$     $>$