


INSPIRED TOTS EARLY LEARNING CENTER
FIRST TERM CONTINUOUS ASSESSMENT, 2024.

NAME: _____ **DATE:** _____

Science



1. The paintbrush is ____ cm. 4. The straw is the _____.

2. The chalk is ____ cm. 5. The chalk is the _____.


3. The straw is ____ cm. 6. The chalk is _____ than the straw.

4. The straw is _____ than the paintbrush.

Conversion

1. 5 m = ____ cm 2. 250 cm = ____ m ____ cm

3. 45 cm + 25 cm = ____ cm 4. 78 cm - 15 cm = ____ cm





Mass



1. Which fruit is the heaviest?

2. Which fruit is the lightest?


3. Which fruit is **lighter** than the orange?

4. Which fruit is heavier than the orange?

5.  150g +  100g =

6.  900g -  150g =

Volume



1. Which bottle holds the most?

2. Which bottle holds the least?

3. How much more should add to C to make 1 litre?

6. which is the most appropriate tool to measure the length of a curtain? A. ruler b. tape
c. stick
7. which is the most appropriate tool to measure the length of a pen ? a. ruler b. tape c. stick
8. The area of a rectangle with a base of 4 inches and a width of 5 inches is ____.
a 20 square inches b. 9 square inches c. 10 square inches
9. A rectangle has one side of 3 and another of 7. What is the area? A. 23 b. 21 c. 19
10. When I am trying to find out how much an object weighs or how much matter it has, I am measuring _____. a. capacity b. mass c. length