









NAME: \_\_\_\_\_

## EXPANDED FORM

Directions: Fill in the chart below to show how many hundreds, tens and ones. The first one has been done for you.

|   |     |   |    |   |   |
|---|-----|---|----|---|---|
|  234   | 200 | + | 30 | + | 4 |
|  513   |     | ○ |    | ○ |   |
|  673   |     | ○ |    | ○ |   |
|  947 |     | ○ |    | ○ |   |
|  682 |     | ○ |    | ○ |   |
|  870 |     | ○ |    | ○ |   |
|  701 |     | ○ |    | ○ |   |
|  457 |     | ○ |    | ○ |   |

How Did You Do? 😊 😐 ☹️