

Name: _____

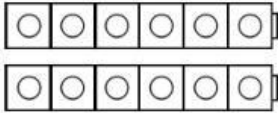
Date: _____

Topic 2-1
Quick Check


Look at the number. **Circle** if it is **even** or **odd**. Then, write an equation to match.

1.

12



____ + ____ = ____



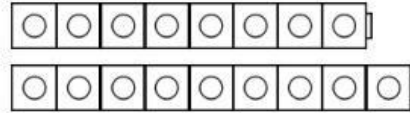
12 is...

even


odd

2.

17



____ + ____ = ____

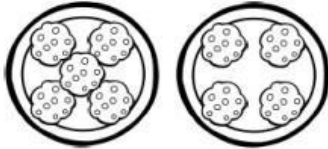


17 is...

even

odd


3. Add the cookies. Is the total **even** or **odd**?



____ + ____ = ____

even or odd

4. Add the dots. Is the total **even** or **odd**?



____ + ____ = ____

even or odd

5. Kim has **3** dogs and **3** cats. How many pets in all? Is the total **even** or **odd**?



____ + ____ = ____

even or odd