






Pictograph: Animal Groups

Each symbol represents 1 animal.

ANIMAL GROUPS	COUNT
Mammals	
Birds	
Fish	
Insects	
Amphibians	

Questions:

a. How many fish are there in the pictograph?

b. Which animal group has the fewest animals?

c. Which group has more animals, mammals or insects?

d. Which groups have the same number?

e. How many animals are there altogether in the pictograph?
