




Name: _____

Date: _____




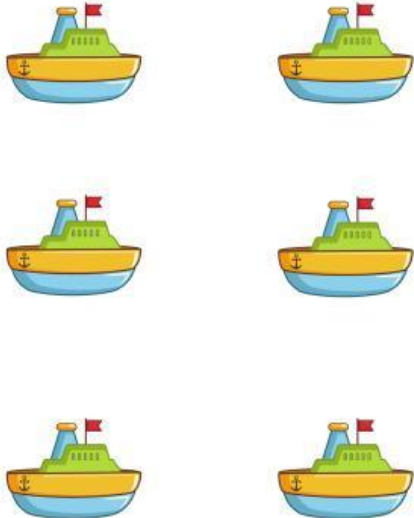
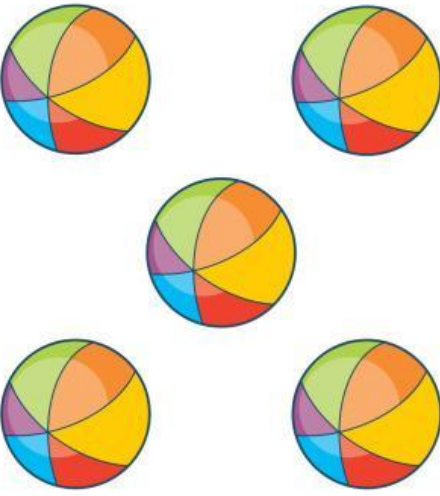

Có bao nhiêu?

Con hãy đếm số hình ảnh và viết số tương ứng vào ô.



Có bao nhiêu?

Con hãy đếm các đối tượng và chọn số tương ứng.

	<p>3</p> <p>4</p> <p>5</p>		<p>6</p> <p>7</p> <p>8</p>
	<p>4</p> <p>5</p> <p>6</p>		<p>7</p> <p>6</p> <p>9</p>
	<p>5</p> <p>6</p> <p>7</p>		<p>6</p> <p>9</p> <p>10</p>