



WINDSOR MODERN COLLEGE  
SECOND QUARTERLY EXAM  
SCIENCE


THIRD GRADE

Name: \_\_\_\_\_ Group: \_\_\_\_\_

Date: \_\_\_\_\_ LN: \_\_\_\_\_

II. Drag the word to complete the Photosynthesis cycle .

sunlight      water      carbon dioxide      oxygen      sugar



II. Drag the word to the correct kind of plant.

Coniferous

flowerings

spores

non-flowering



\_\_\_\_\_



\_\_\_\_\_



\_\_\_\_\_



\_\_\_\_\_


III. Match the part of the plant with their correct name and answer. (\_\_\_/6)

Which part of the plant stores the food? \_\_\_\_\_

Which part of the plant transports the food? \_\_\_\_\_




stem



fibrous



thin stem



taproot