



# SYMMETRY

Choose the correct option




Which figure has symmetry lines




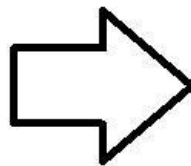
The number of lines in a circle

1      2      3      More than 4

Make a symmetry line for the following



Write the number of symmetry in each figure



Tick the letters which has more than 1 symmetry lines

A      H      I      Z      N      O      L