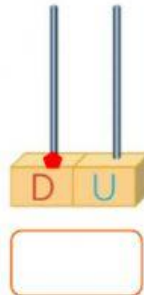
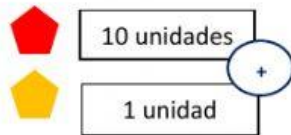


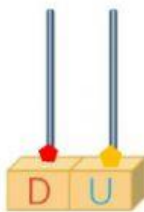
# DECENAS Y UNIDADES

1. Construye la familia del 10, contando las decenas y unidades en el ábaco.

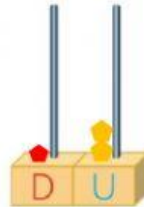


D	U

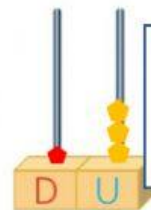
+



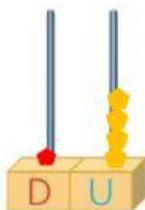
D	U



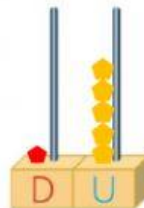
D	U



D	U



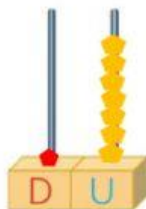
D	U



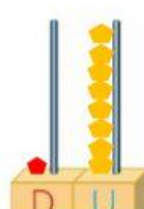
D	U



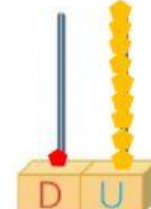
D	U



D	U



D	U



D	U