

H Warmups Week 3 (9/9 - 9/13)

Monday

What was the main purpose of the separation lab?

Tuesday

Classify each substance as an element or a compound.

- a. water
- b. oxygen
- c. table salt
- d. sucrose
- e. gold

Wednesday

In a physical change are made

melting

firework

no new substances

freezing

A will always produce one or more new substances

melting

chemical change

boiling

firework

Hydrogen peroxide dental strips will make your teeth whiter.

☐ A. Physical Property

☐ B. Chemical Property


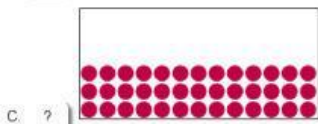


A log of wood is chopped up with an axe into smaller pieces of wood.

☐ A. Physical Property

☐ B. Chemical Property


Thursday

Which one of the following diagrams best represents a model of the particles in a solid?



H Warmups Week 3 (9/9 - 9/13)

Which state of matter is represented in the following diagram?



- A. ☐ Liquid
- B. ☐ Gas
- C. ☐ Gas and liquid
- D. ☐ Solid

Friday

No warm-up we need to focus on the lab.