

My name is: _____


WORKSHEET

FFs0 – Topic 5.3

Teacher's feedbacks

Task 1: Read and fill in the blanks.

(Đọc và điền vào chỗ trống nhé.)



Squ__re



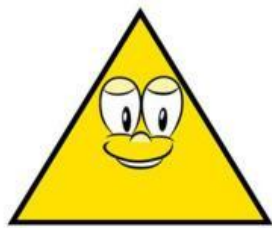
C__rcle




Di__mond



__val



Tri__ngl__



R__ctangle



__tar




__eart


Task 2: Listen and choose the correct answer.

(Nghe và chọn đáp án đúng nhé.)

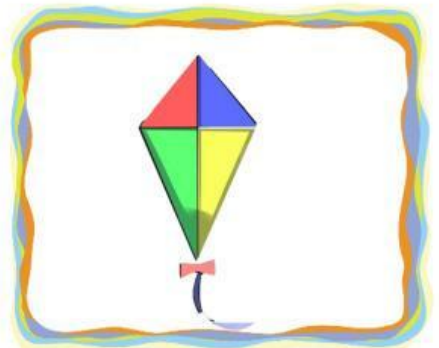

1.



2.



3.




4.



Task 3: Read and choose the correct answer.

(Đọc và chọn đáp án đúng.)

1. What shape is the square?**A.** It has 5 sides.**B.** It has 4 equal sides.**C.** It has no sides.**2.** How many sides does the rectangle have?**A.** It has 4 sides.**B.** It has 2 short sides and 2 long sides.**C.** It has 3 sides.**3.** How many sides does the diamond have?**A.** It has 4 sides.**B.** It has 2 sides.**C.** It has no sides.

4. How many sides does the star have?

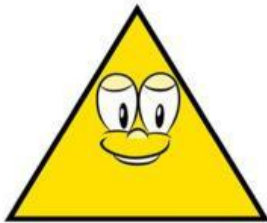


A. It has 4 sides.

B. It has 10 sides.

C. It has no sides.

5. How many sides does the triangle have?



A. It has 3 sides.

B. It has 5 sides.

C. It has 1 side.

6. How many sides does the oval have?



A. It has 4 sides.

B. It has 2 short sides.

C. It has no sides.

7. How many sides does the heart have?



A. It has 4 sides.

B. It has 2 sides.

C. It has no sides.