


Name: _____


Date: _____

Understanding the Value of Money


Activity 4: Identifying Amounts of Coins and Bills


DIRECTIONS: Circle the amount that matches the picture.

1.  A. \$0.16 B. \$1.60 C. \$1.06

2.  A. \$0.85 B. \$85 C. \$0.58

3.  A. \$0.14 B. \$1.40 C. \$0.41

4.  A. \$1.25 B. \$10.25 C. \$102.50

5.  A. \$5.03 B. \$5.14 C. \$5.30

DIRECTIONS: Write the total amount of money below. Use the dollar sign and decimal point.










6. _____