


Grade 2 Science Revision


Name: _____

Class: _____

A. Circle the objects that are flexible.



B. Cross the materials that are NOT SOFT.



C. Match the objects to the materials that they are made of.



metal

glass

plastic

wood

fabric

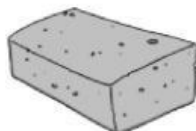
D. Cross the odd one out.

 Paper	 Glass	 Wood
		
		
		
		

E. Match the different materials to their properties.



cushion



sponge



rock



rubber band

absorbent

flexible

hard

soft