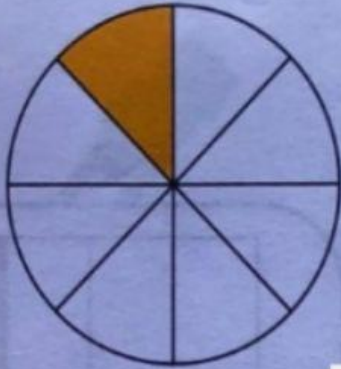


Look at the diagrams carefully. Fill in the spaces with the correct answers.

## FRACTIONAL PARTS

4



Fraction shaded:  $\frac{\quad}{\quad}$

Name in words:

5



Fraction shaded:  $\frac{\quad}{\quad}$

Name in words:


6



Fraction shaded:  $\frac{\quad}{\quad}$

Name in words:

7



Fraction shaded:  $\frac{\quad}{\quad}$

Name in words:

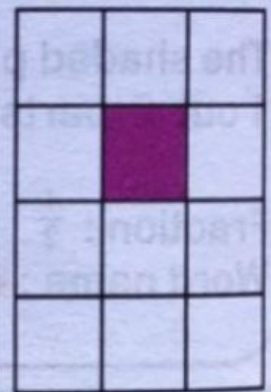
8



Fraction shaded:  $\frac{\quad}{\quad}$

Name in words:

9



Fraction shaded:  $\frac{\quad}{\quad}$

Name in words: