

Name : _____

3D SHAPE

Write up the correct label on the shapes! The answers have been provided below!

Cube

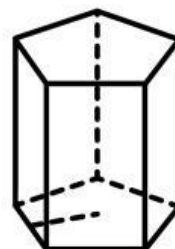
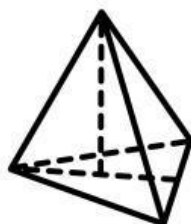
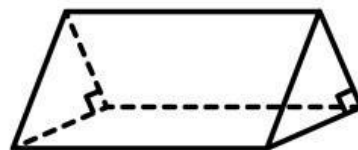
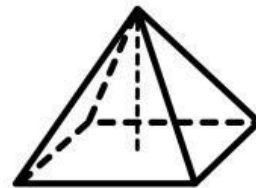
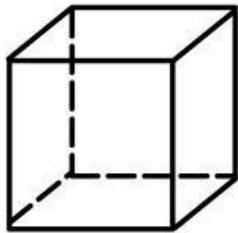
Triangular Prism

Pentagonal Pyramid

Triangular Pyramid

Quadrilateral Pyramid

Pentagonal Prism





Word Problems



Alex and Arav buy five tomatoes. Each tomato has eight seeds. How many seeds are there in total? If they split the seeds between them, how many will each get?

Answer:

Two people were going for a walk in a forest. They saw 8 groups of 6 lions. Then 9 of the lions ran away. How many lions were left?

Answer:



ABilly Bob Joe is thinking of a 2-digit number. If you multiply this number by 5 you will get 200. What is the number?

Answer:



AThree people are thinking of one number that is a multiple of 10, a multiple of 5, and a multiple of 3. The number is less than 55. What is the number?

Answer:

FILL IN THE BLANKS

Set 2: Multiplication and Division

Determine the missing value in the number sentences below.

Name: _____ Class: _____



$$10 \times \square = 110$$

$$8 \times \square = 72$$

$$\square \div 2 = 24$$

$$\square \div 6 = 9$$

$$12 \times 5 = \square$$

$$9 \times 3 = \square$$


$$72 \div \square = 6$$


$$\square \times 12 = 144$$

$$\square \times 7 = 42$$

$$36 \div 9 = \square$$







PLANT LIFE!

WORD SEARCH - LEVEL 1

Find the words listed below and circle them.

| | | | | | | | | | | | |
|---|---|---|---|---|---|---|---|---|---|---|---|
| L | S | P | O | L | L | E | N | Z | C | S | X |
| E | T | E | I | K | I | F | L | O | W | E | R |
| A | E | T | G | I | N | G | Y | A | M | I | L |
| V | M | A | I | S | F | R | O | N | P | L | S |
| E | M | L | G | K | R | O | Q | C | L | D | E |
| S | O | I | L | I | N | O | N | I | A | I | E |
| D | N | S | H | O | O | T | S | N | N | N | D |
| E | G | L | O | N | L | S | O | G | T | G | N |
| W | A | T | E | R | C | Y | C | L | I | F | E |

- SEED
- WATER
- ROOTS
- POLLEN

- LEAVES
- PETAL
- STEM
- SHOOTS

- FLOWER
- PLANT
- LIFE
- SOIL

ANIMALS & HABITATS

Directions: Cut out the names of the habitats. Paste the habitat label under the animal that lives in that habitat.



rainforest

desert

ocean

grassland

forest

tundra