

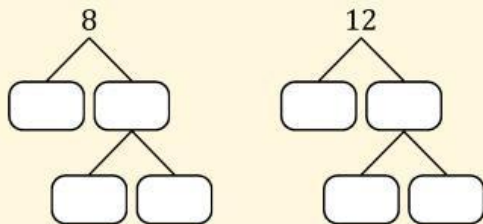
Nama : \_\_\_\_\_

Kelas : \_\_\_\_\_

# BILANGAN BULAT

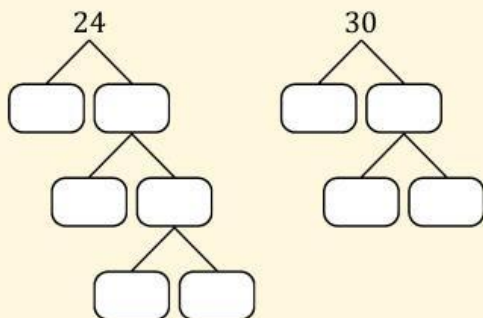
Tentukan FPB dan KPK bilangan-bilangan di bawah ini menggunakan pohon faktor

1 8 dan 12



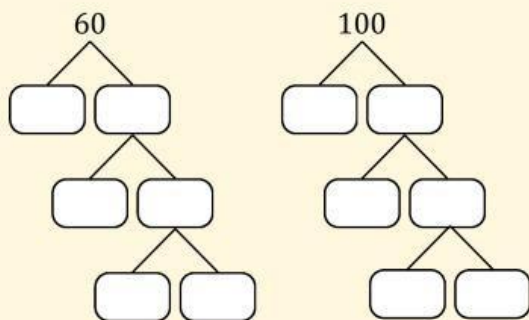
FPB = \_\_\_\_\_      KPK = \_\_\_\_\_

2 24 dan 30



FPB = \_\_\_\_\_      KPK = \_\_\_\_\_

3 60 dan 100



FPB = \_\_\_\_\_      KPK = \_\_\_\_\_