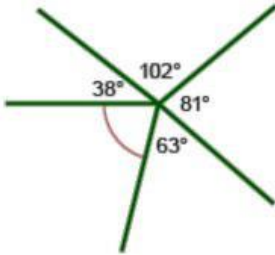


## Test 1: Angles

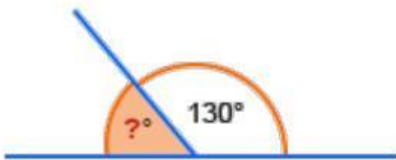
Name.....

1. Calculate the size of the marked angle.



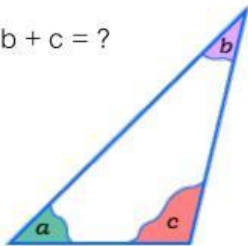
Answer.....

2. The bottom line is straight.  
What is the size of the shaded angle?



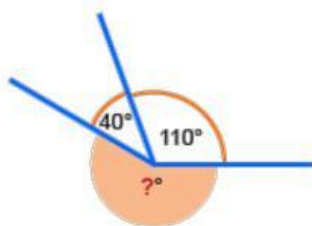
Answer.....

3.  $a + b + c = ?$



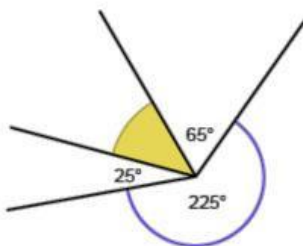
Answer.....

4. What is the size of the shaded angle?



Answer.....

5. What is the size of the shaded angle?



Answer.....