

Q.1 Match the columns.

Column A	Column B
Semi means	Semi circle
2 quarter circles	$67 + 5$
A circle	Half
$30 + 4$	4 quarter circles
$80 - 8$	$40 - 6$

Q.2 Choose the correct operation for the given situations.

a) There are 3 098 dresses in a shop. Out of them 2 699 having price tags on them. Find the number of dresses not having price tags ?

(i) Addition (ii) Subtraction (iii) Both Addition and Subtraction

b) In a factory, 5 178 bottles of shampoo were packed on Monday and 4 587 bottles were packed on Tuesday. How many bottles were packed in both days?

(i) Addition (ii) Subtraction (iii) Both Addition and Subtraction

Q.3 Sana made 2 387 paintings, 989 paintings were sold in an exhibition. How many paintings were left with her?

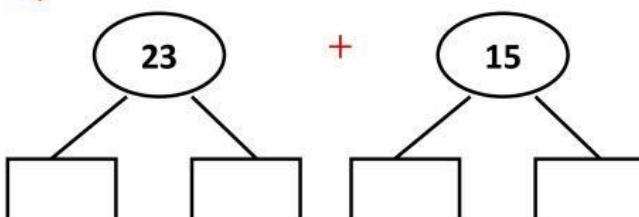
Solution:

$$\begin{aligned} & \underline{\hspace{2cm}} = \underline{\hspace{2cm}} \\ & \underline{\hspace{2cm}} = \underline{\hspace{2cm}} \\ & \underline{\hspace{2cm}} = \underline{\hspace{2cm}} \bigcirc \underline{\hspace{2cm}} \\ & \hspace{10cm} = \underline{\hspace{2cm}} \end{aligned}$$

Working				

Q.4 Solve using mental strategy and complete the following.

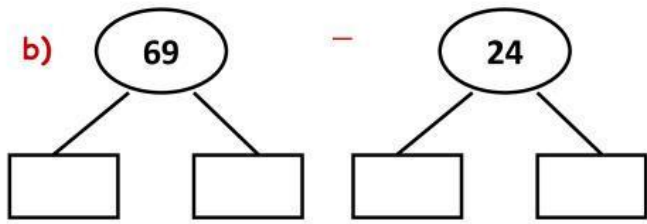
a)



$$\boxed{\phantom{00}} + \boxed{\phantom{00}} = \boxed{\phantom{00}}$$

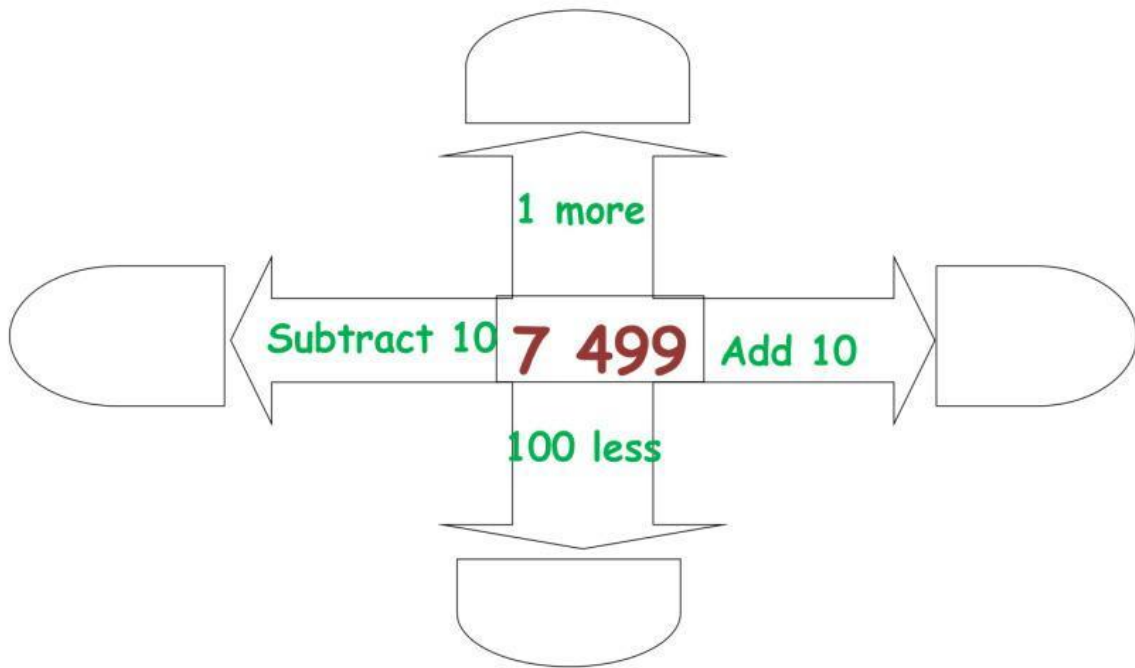
$$\boxed{\phantom{00}} + \boxed{5} = \boxed{\phantom{00}}$$

$$\boxed{23} + \boxed{15} = \boxed{\phantom{00}}$$



	-	20	=	
	-		=	
69	-	24	=	

Q.5 Solve and fill in the boxes.



Q6. Select the correct option.

(i) Round off 52 to nearest 10

60

50

(ii)  $7 + 78$  is estimated to

80

90

(iii)  $99 - 3$  is estimated to

90

100