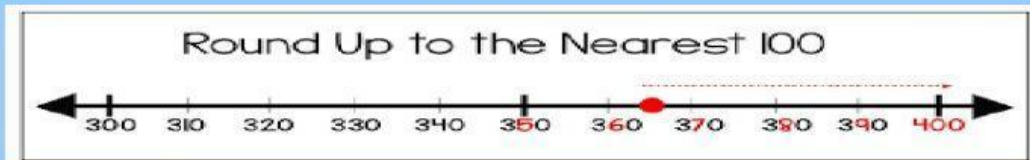


Name _____ Date _____

Rounding to the Nearest Hundred

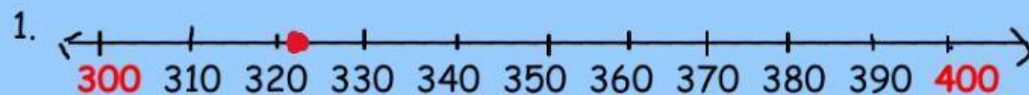
Use the number lines below to help you round each given number to the nearest hundred.

The red dot shows where each number is on the number line.



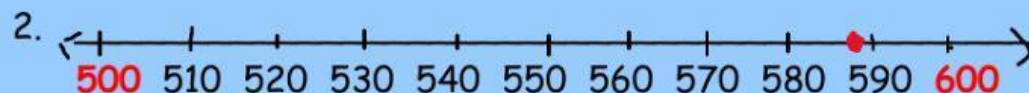
Example: What is 365 rounded to the nearest hundred?

Answer 400



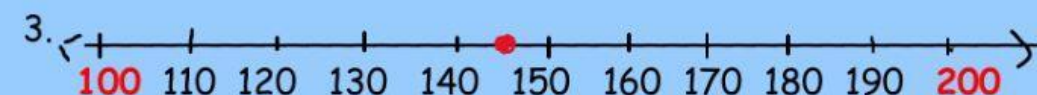
What is 323 rounded to the nearest hundred?

Answer _____



What is 588 rounded to the nearest hundred?

Answer _____



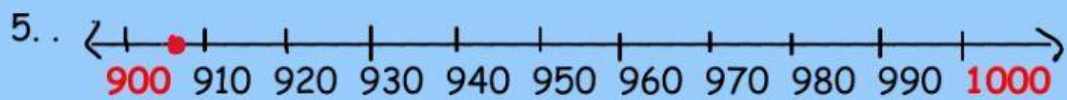
What is 145 rounded to the nearest hundred?

Answer _____



What is 550 rounded to the nearest hundred?

Answer _____



What is 906 rounded to the nearest hundred?

Answer _____