


The Scales of G, D, and F Major


G major scale, ascending

Degrees: Tonic (1st) 2nd 3rd 4th 5th 6th 7th Tonic (8th)



D major scale, ascending

Degrees: Tonic (1st) 2nd 3rd 4th 5th 6th 7th Tonic (8th)




F major scale, ascending

Degrees: Tonic (1st) 2nd 3rd 4th 5th 6th 7th Tonic (8th)



Exercise 1: Write the name of each scale and tick either ascending or descending




Scale:

ascending

☐

descending

☐


Scale:

ascending

☐


descending

☐



Exercise 2: Tick the notes that need an accidental! (either sharp or flat)

G major, descending


G major notes



F major, descending






D major, ascending





Exercise 3: Choose one correct answer (tick it!)

- | | | | | |
|----------|---|-----|-----|-----|
| a | Which note is the 5th degree of G major? | D | C | A |
| b | Which note is the 3rd degree of D major? | C# | F# | F |
| c | Which note is the 7th degree of F major? | Bb | G | E |
| d | Which degree of F major is this?  | 5th | 4th | 3rd |
| e | Which degree of D major is this?  | 2nd | 3rd | 7th |
| f | Which degree of G major is this?  | 6th | 4th | 2nd |