

Thứ .... ngày .... tháng .... năm 2024

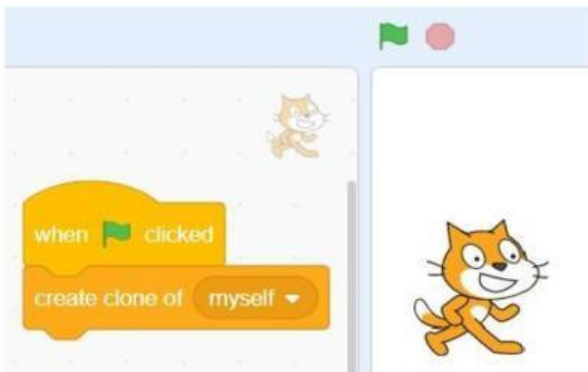
Học sinh: .....

Lớp : .....

## PHIẾU ÔN TẬP HKICO – SCRATCH BUỔI 3


**1. Given the script and scene below.  
How many clones will be made in each  
time the green flag is clicked?**

- A. 1                                      B. 2  
C. 3                                      D. 4  
D. Unlimited



**3. Building blocks in Scratch includes  
many categories, for example, Motion,  
Looks, Sound, Events. Which category  
does the following block belong to?**

- A. Motions  
B. Events  
C. Operators  
D. Sensing  
E. Control



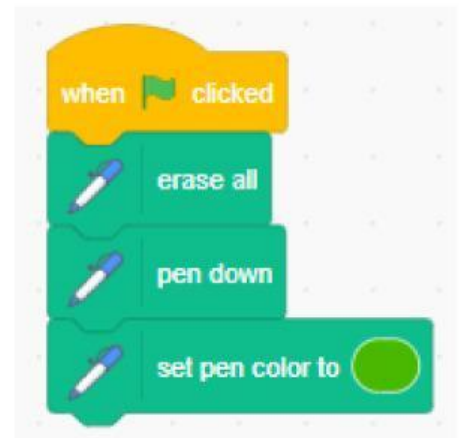
**2. In the stack of  
blocks below, how  
many times does the  
sprite move 10 steps?**

- A. 6  
B. 7  
C. 8  
D. 9  
E. None of the above



**4. What color will the picture be drawn with?**

- A. Red  
B. Blue  
C. Green  
D. Black  
E. Pink



**5. What's the meaning of the following scripts?**

- A. When the right arrow key is pressed,  
change y by 10.  
B. Change the value Y if the right arrow  
key is pressed.  
C. Repeat forever when the right arrow  
key pressed and or x by 10.  
D. Repeat forever if the right arrow key  
pressed then change x by 10.  
E. None of the above.



**6. You can use \_\_\_\_\_ blocks to program draw a quadrangle?**

- A. Motion                                      B. Look  
C. Variable                                      D. Pen  
E. Event

**7. What will happen when the Green flag is clicked?**

- A. Make the sprite moves.
- B. Make the sprite spins.
- C. Start the game.
- D. Make the sprite goes to random position.
- E. None of the above.

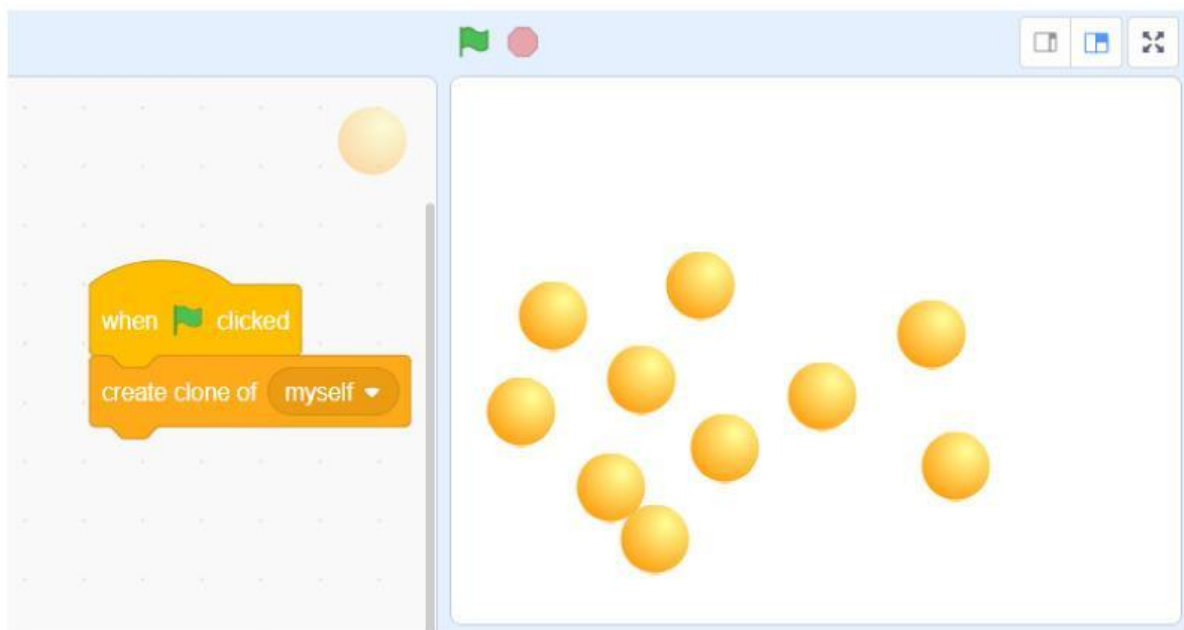


**8. What does these scripts mean?**

- A. If the sprite touches color purple, the sprite will move 10 steps.
- B. If the sprite moves color orange, all sprites will stop.
- C. If the sprite meets color orange then, the sprite will move 10 steps.
- D. If the sprite touches color orange, the sprite will move 10 steps and stop.
- E. None of the above.



**9. How to delete all newly created clones?**



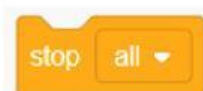
- A. Use command



- B. Use command



- C. Use command



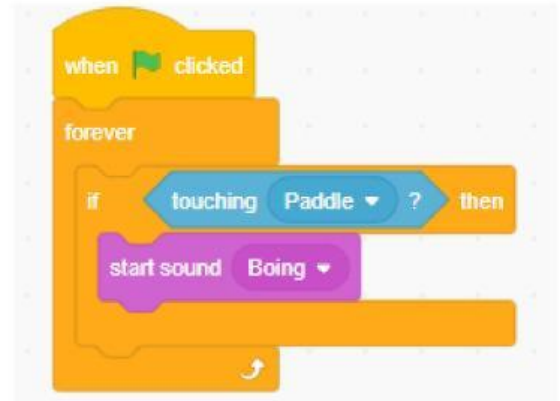
- D. Use command



- E. None of the above

**10. Given the following scene. What will happen when the Green flag is clicked?**

- A. Repeat forever sound Boing.
- B. When the ball touches the paddle, the ball will start to make a sound.
- C. If the ball touches the paddle, the ball will start to make a sound forever.
- D. Repeat forever if the ball touches the paddle.
- E. None of the above.



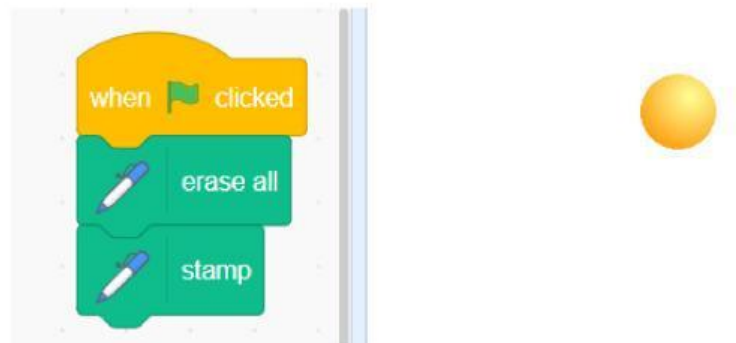
**11. Building blocks in Scratch are divided into many categories, for example, Motion, Events, Operators. Which category does the following block belong to?**



- A. Motion
- B. Events
- C. Operators
- D. Sensing
- E. Control

**12. Given the script and scene below. How many clones will be made in each time the green flag is clicked?**

- A. 1
- B. 2
- C. 3
- D. 4
- E. Unlimited



**13. Refer to the following script, what is the value of "my variable" after pressing space twice?**

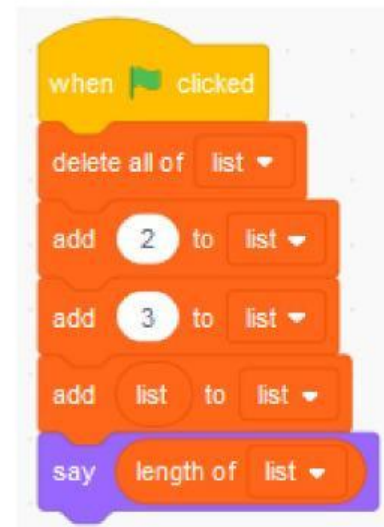
- A. 0
- B. 2
- C. 3
- D. 6
- E. 12



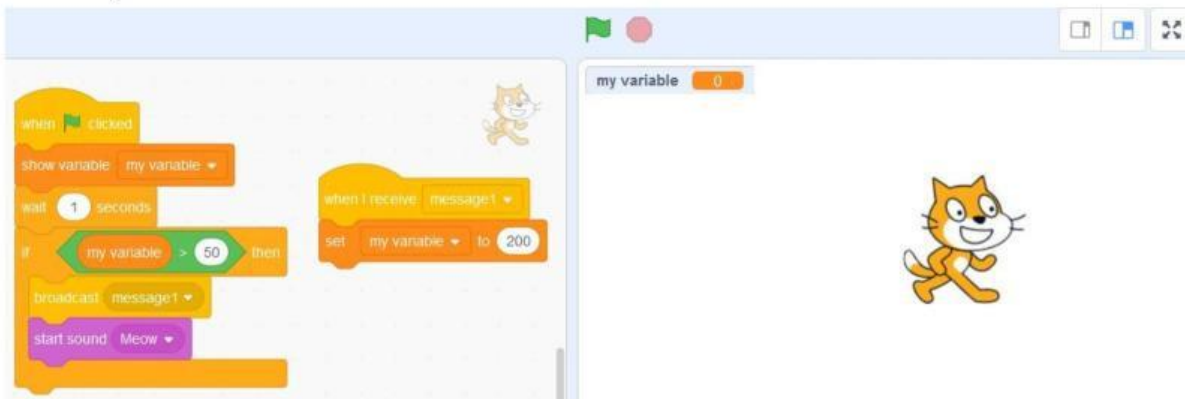


14 What would the sprite say after executing the following script?

- A. 2
- B. 223
- C. 4
- D. 3
- E. None of the above



15. The cat does not “meow” after green flag is clicked, which of the following option is the explanation?



- A. 200 is not larger than 50.
- B. Wait 1 second is too short.
- C. Wrong message is broadcasted.
- D. “message1” is not broadcasted.
- E. None of the above.

16. What would the sprite say after executing the following script?

- A. 50
- B. 25
- C. 2
- D. 0
- E. None of the above

