



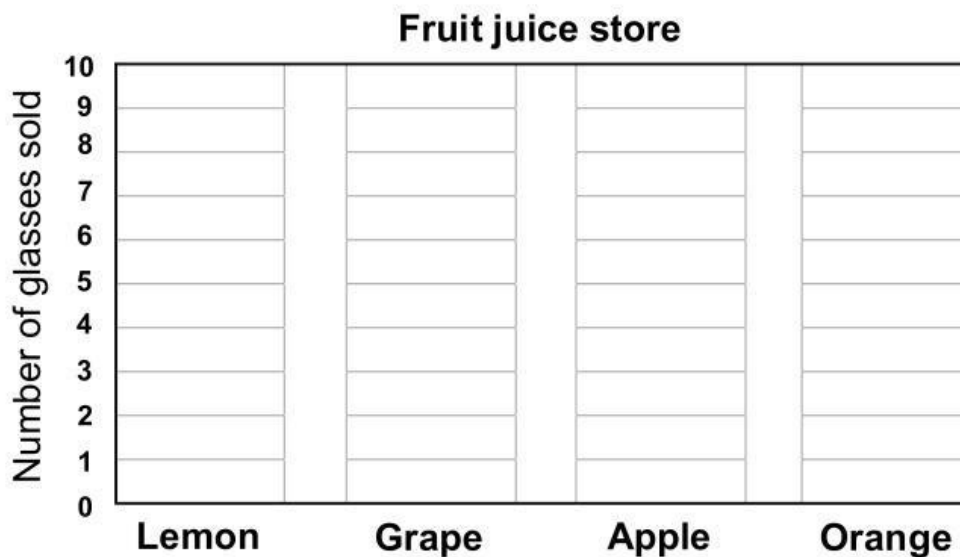


## Juice store bar graph

### Data and Graphing Worksheet

A fruit juice store recorded the number of glasses sold.  
Create a bar graph and answer the questions.

Fruit juice	Lemon	Grape	Apple	Orange
Number of glasses sold	 7	 10	 9	 8



1. What juice sold the most? \_\_\_\_\_
2. What juice sold the least? \_\_\_\_\_
3. How many glasses of apple juice were sold? \_\_\_\_\_
4. How many more glasses of grapes juice were sold than lemon juice? \_\_\_\_\_
5. How many glasses of orange and apple juice together were sold? \_\_\_\_\_
6. How many glasses were sold in all? \_\_\_\_\_