




# General Exercise 1

Instructions: Look at the melody below then answer the questions.



1. What is the name of the clef? \_\_\_\_\_
2. Another way to write the time signature is \_\_\_\_\_
3. How many counts/beats are there in each bar? \_\_\_\_\_
4. In which bars can you find only crotchet notes? \_\_\_\_\_
5. Which bar has only a semibreve note? \_\_\_\_\_
6. How many note C's are there in the melody? \_\_\_\_\_
7. How many minim notes are there in the melody? \_\_\_\_\_
8. How many counts/beats is the last note in the melody? \_\_\_\_\_
9. In which bars can you find this melody  ? \_\_\_\_\_
10. How many times do you see this rhythm  ? \_\_\_\_\_

