



INSPIRED TOTS EARLY LEARNING CENTRE

Joseph Akande Close, New Haven Rantya,

State Low-cost, Jos Plateau State

Cellphone: 08068681147, 08064937490, email: inspiredtelc@gmail.com

5th GRADE THIRD TERM EXAMINATION 2023/2024

SCIENCE

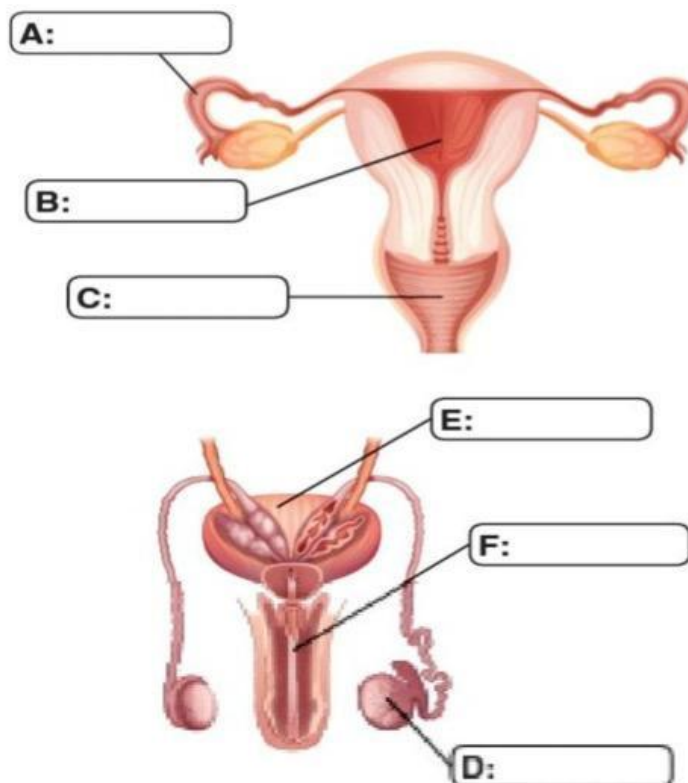
NAME:

INSTRUCTION: Complete the sentences using the words in the box.

Saws	planes	operated	mark	fretsaws
------	--------	----------	------	----------

1. A hand tool is a tool which is held and _____ by the hands.
2. A centre punch, a scribe and a divider are hand tools that can be used to _____ wood.
3. Hand saws produce a straight edge and _____ produce a curved edge.
4. _____ are used to reduce the thickness of wood and create a smooth edge.
5. _____ are hand tools used to cut wood.

6. Look at the diagrams. What do the letters represent?





INSPIRED TOTS EARLY LEARNING CENTRE

Joseph Akande Close, New Haven Rantya,
State Low-cost, Jos Plateau State

Cellphone: 08068681147, 08064937490, email: inspiredtelc@gmail.com

5th GRADE THIRD TERM EXAMINATION 2023/2024

7 Complete the sentences using the words in the box.

blood heart oxygen lungs blood vessels

- a) The _____ is a muscle about the size of your fist.
- b) It pumps _____ throughout your body all the time through _____.
- c) When blood is pumped throughout your body, it contains _____ and other substances.
- d) After blood has moved throughout your body, it is pumped to your _____, where it collects more oxygen.

8 Match each blood vessel with its correct feature.

- | | | |
|-----------|---|------------------------------|
| Vein | • | • very thick walls |
| Artery | • | • very thin walls |
| Capillary | • | • carries blood to the heart |



INSPIRED TOTS EARLY LEARNING CENTRE

Joseph Akande Close, New Haven Rantya,

State Low-cost, Jos Plateau State

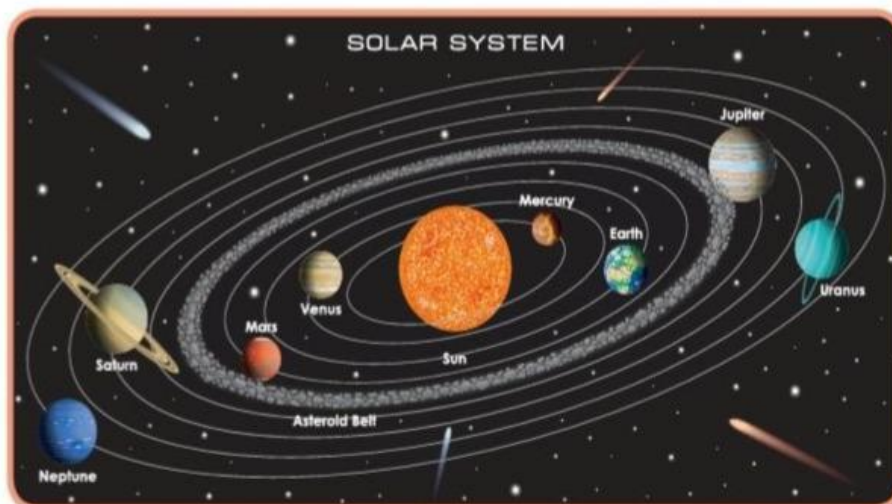
Cellphone: 08068681147, 08064937490, email: inspiredtelc@gmail.com

5th GRADE THIRD TERM EXAMINATION 2023/2024

- 9 Complete the sentences using the words in the box.

axis Sun complete Sun light revolution
Earth planets rotates Solar

- a) Earth _____ anticlockwise on its _____.
- b) It takes 24 hours to _____ one full rotation.
- c) Our _____ System is the name given to the _____ and all the _____ that go around it.
- d) The Sun provides _____ for _____.
- e) Earth revolves around the _____.
- f) It takes $365\frac{1}{4}$ days for Earth to complete one _____.





INSPIRED TOTS EARLY LEARNING CENTRE

Joseph Akande Close, New Haven Rantya,
State Low-cost, Jos Plateau State

Cellphone: 08068681147, 08064937490, email: inspiredtelc@gmail.com

5th GRADE THIRD TERM EXAMINATION 2023/2024

10. Write the simple machine that each picture represents.

lever

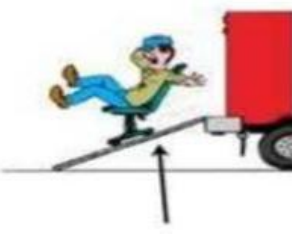
wheel & axle

wedge

inclined plane

pulley

screw



11. Complete the sentences below using the words in the box. Words may be used more than

position power agility balance movement
flexibility strength

- a) Components of fitness include speed, strength, endurance,
_____, _____, _____
and _____.
- b) _____ is the ability to stay in a particular position
without falling.
- c) Flexibility is the range of _____ that a person has
around their joints.
- d) Power is explosive _____. It is the ability to be
strong but at speed.
- e) A person who is agile can change the _____ of their
body very quickly.



INSPIRED TOTS EARLY LEARNING CENTRE

Joseph Akande Close, New Haven Rantya,
State Low-cost, Jos Plateau State

Cellphone: 08068681147, 08064937490, email: inspiredtelc@gmail.com

5th GRADE THIRD TERM EXAMINATION 2023/2024

12. Look at the picture showing an athlete about to start the hurdle race.

a) Where should their lead leg be positioned?

b) Where should their take-off leg be positioned?



13. Look at the picture showing a baton being passed.

a) What is this method of passing the baton called?

b) Name two other methods of passing the baton.

c) Where should the athlete receiving the baton be looking when making contact with the baton?





INSPIRED TOTS EARLY LEARNING CENTRE

Joseph Akande Close, New Haven Rantya,
State Low-cost, Jos Plateau State

Cellphone: 08068681147, 08064937490, email: inspiredtelc@gmail.com

5th GRADE THIRD TERM EXAMINATION 2023/2024

14. Choose from the box the correct force used in each picture.

Gravitational

Compression

Magnetic

Elastic

Friction







