

Ruang

13.2 ► Bentangan bentuk tiga dimensi.

A Padankan bentuk tiga dimensi dengan bentangannya. S.P. 13.2

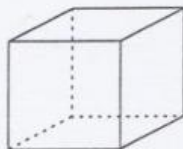
Contoh



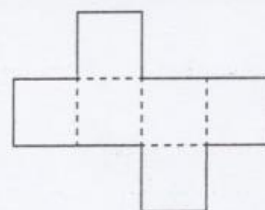
(a)



1



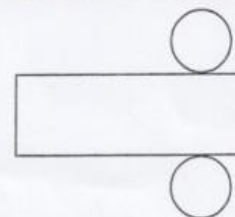
(b)



2



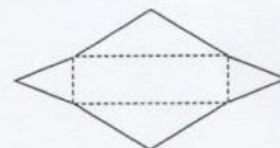
(c)




3



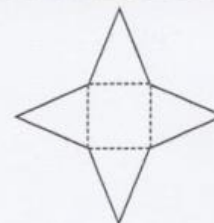
(d)



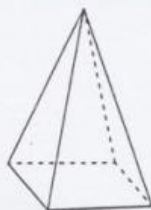
4



(e)



5



(f)

