



Review Final Test

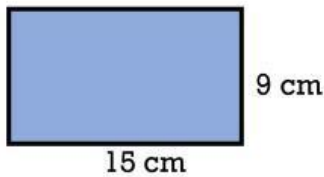
Name: _____

Class: _____

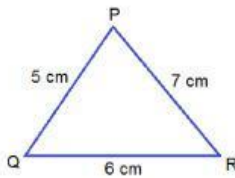
1. The name of the quadrilateral below is _____



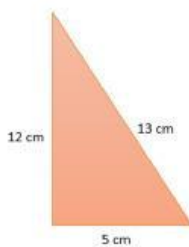
2. The side of the square is 12 cm. So, the area of the square is _____ cm^2 .
3. Look at the rectangle below. The perimeter is _____ cm.



4. Look at the triangle below. The perimeter is _____ cm.



5. 3 years = _____ months.
6. 5 months + 10 days = _____ days.
7. She is 2 decades and 5 years. So, she is _____ years.
8. The area of the triangle below is..... cm^2



9. 50 years = _____ decades.
10. She has been reading for 90 minutes. So, she has been reading for hour and minutes.
11. The rectangular garden has 65 m long and 35 m wide. The perimeter of the garden is _____ m
12. The pool has 12 m long and 10 m wide. The area of the pool is _____ cm^2 .