

**8.1. TIME**

Name: \_\_\_\_\_ Date: \_\_\_\_\_ Class: \_\_\_\_\_

**Part 1. Write the times these clocks show.**

half past
o'clock



\_\_\_\_\_



\_\_\_\_\_



\_\_\_\_\_



\_\_\_\_\_



\_\_\_\_\_



\_\_\_\_\_


**Part 2. Draw a ring around the correct time.**




4 o'clock    5 o'clock    6 o'clock


Part 3. Write the correct day in each empty space.


Monday Tuesday Wednesday Thursday Friday Saturday Sunday

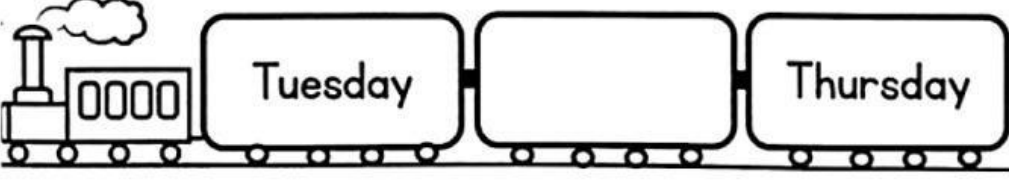
1.  Wednesday Thursday

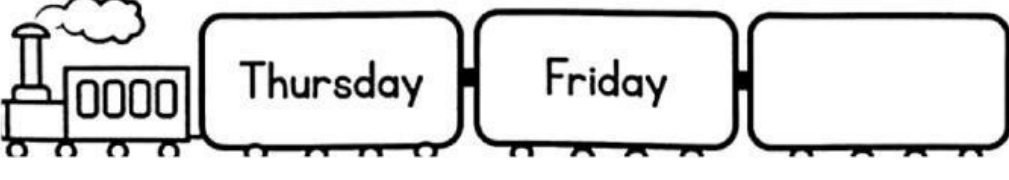
2.   Friday Saturday

3.  Sunday  Tuesday

4.  Friday  Sunday

5.  Friday  Sunday

6.  Tuesday  Thursday

7.  Thursday Friday