

9

Numbers to 20

> 9.1 Counting to 20

1. Write the missing numbers.

1	2	3	4	5	6	7	8	9	10
11	12	13		15	16		18		20

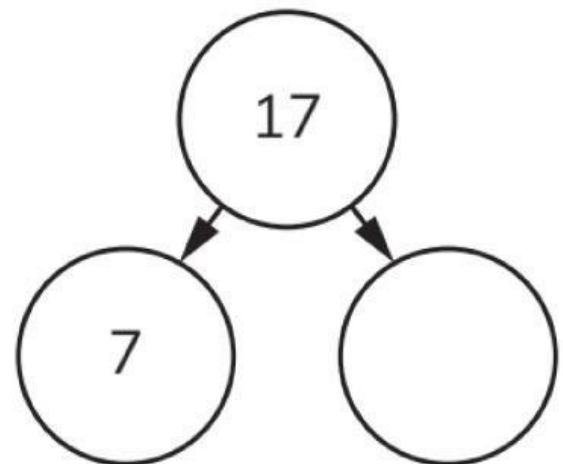
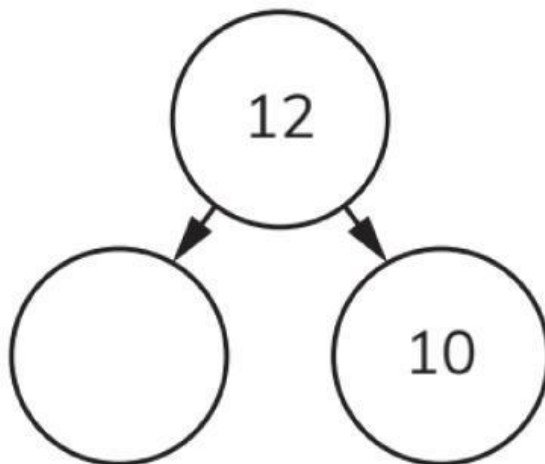
2. Write the missing numbers.

14	
----	--

12		
----	--	--

18		
----	--	--

3. Complete these part-whole diagrams.



4. Write these numbers in words. Use these words to help you.

six seven eight

16	
17	
18	

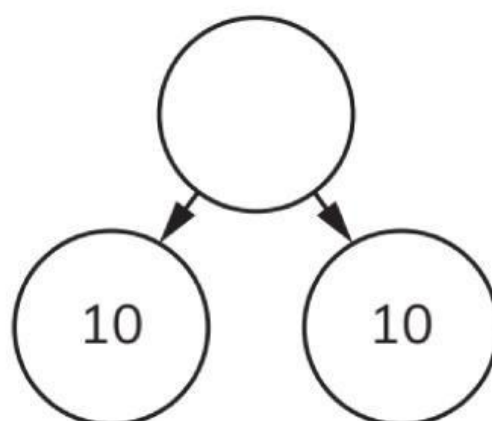
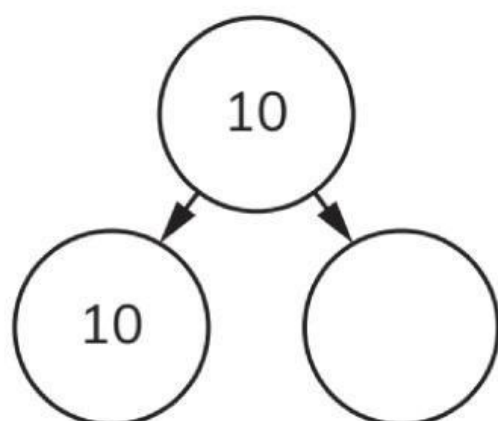
5. Write the missing numbers.

	16	
--	----	--

	12	
--	----	--

	14	
--	----	--

6. Complete these part-whole diagrams.



7. Write these numbers in words.

12	
14	
19	

7. Write the missing numbers.

14 = tens and ones

17 = tens and ones

1 ten and 6 ones =

2 tens and 0 ones =