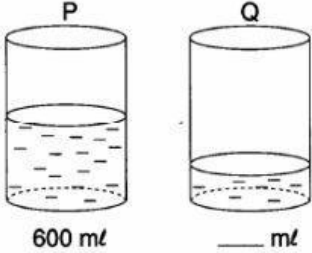
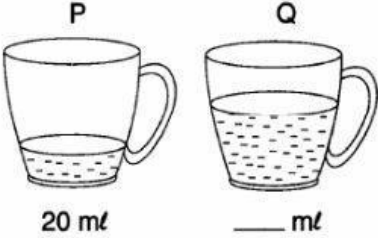
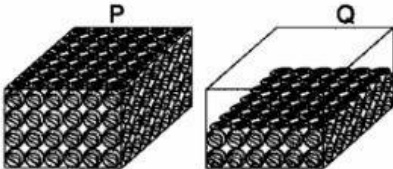
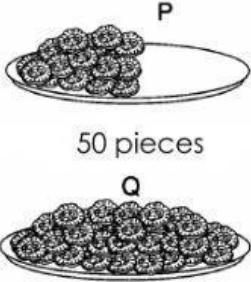
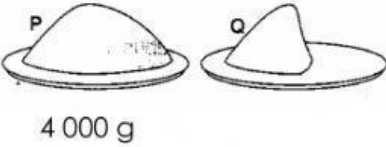


# ESTIMATE MORE OR LESS

Choose the correct answer.

1	 <p>600 ml      ___ ml</p>	<p>The volume of liquid in glass Q is</p> <p><input type="text"/> more than <input type="text"/> less than 600 ml.</p>
2	 <p>20 ml      ___ ml</p>	<p>The volume of liquid in cup Q is</p> <p><input type="text"/> more than <input type="text"/> less than 20 ml.</p>
3	 <p>300 marbles</p>	<p>The number of marbles in box Q is</p> <p><input type="text"/> more than <input type="text"/> less than 300 marbles.</p>
4	 <p>50 pieces</p>	<p>The number of cookies in plate Q is</p> <p><input type="text"/> more than <input type="text"/> less than 50 pieces.</p>
5	 <p>4 000 g</p>	<p>The mass of flour in plate Q is</p> <p><input type="text"/> more than <input type="text"/> less than 4 000 g.</p>

BY TEACHER NADIA @ SK STELLA MARIS