

Name _____ Date _____

Unit 8 test: Time

1 Write in words the times shown on these digital clocks.

a 

b 

c 

d 

2 Write the numbers on the digital clocks to show the time.


a two fifteen




b ten forty-five



c one minute past seven



d nine thirty-eight



3 Write the correct time under each clock.

a



b



c



d



e



f



4 Write on the digital clock to match the time on the analogue clock.

a



b



c



d



5 Draw lines to match the analogue time with the digital time.



9:04



6:12



5:18











8:28



3:42

6 Write the correct digital time under each clock.

			
I	E	M	O

			
Y	S	T	P

Now write the correct letter under each time to crack the code.

8:15	6:05

8:15	11:47

11:47	8:15	10:45	9:18

11:47	4:45

6:05	11:47	4:45	3:38

7:12	9:18	11:47