


CAMBRIDGE PRIMARY MATHEMATICS 2
REVIEW UNIT 9 (WS2)

Name: _____

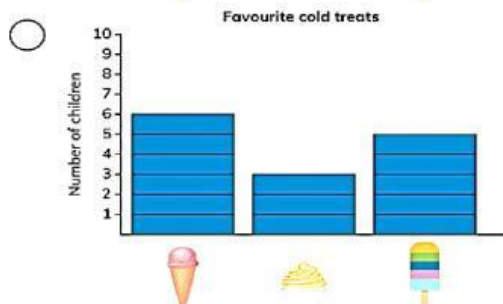
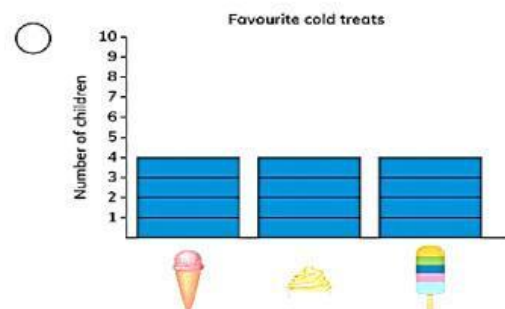
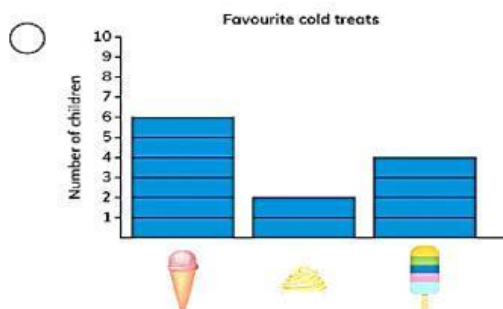
Date: _____

Class: _____

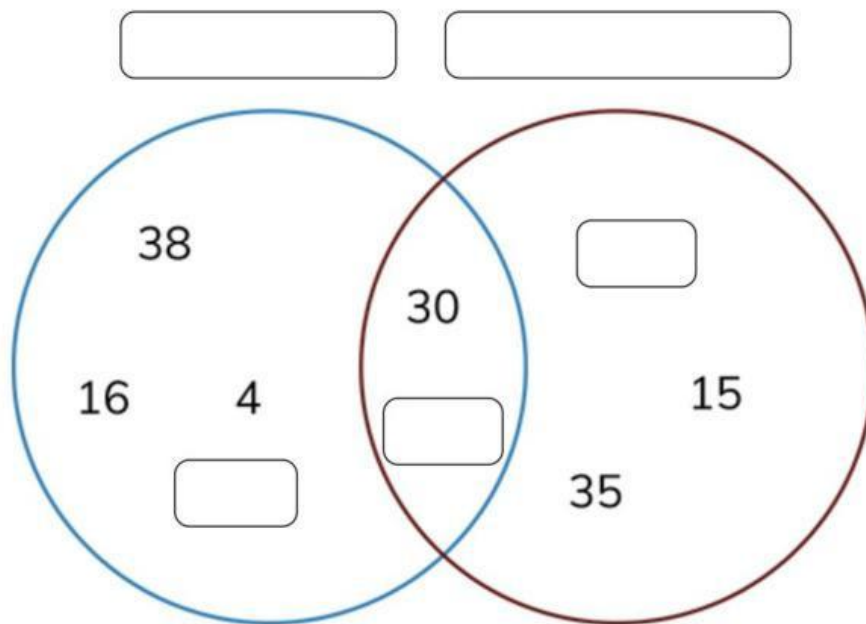
Part 1. Look at the picture and answer the questions.



1. How many children are there in the class? _____
2. Which cold treats was chosen the most? _____
3. Which cold treats was chosen the least? _____
4. Which show the same information as the pictogram?



Part 2. Write the words and numbers to label the Venn diagram.



20

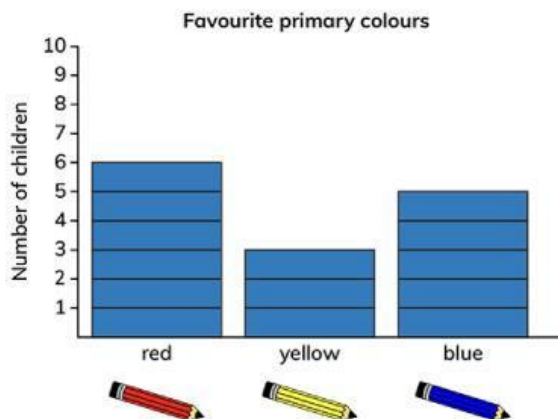
22

25

even numbers

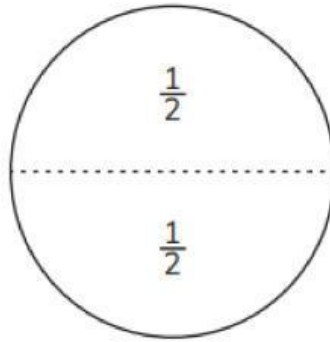
in the 5 times table

Part 3. A class chose their favourite primary colours. Look and answer the questions.



- How many children are there in the class? _____
- How many children chose red? _____
- How many children chose yellow and blue? _____
- Which colours was chosen the most? _____
- Which colours was chosen the least? _____

Part 4. Find the missing numbers.



a $\frac{1}{2}$ of 2 =

b $\frac{1}{2}$ of 4 =

c $6 \div 2 =$

d $8 \div 2 =$

e $10 \div 2 =$

f $\frac{1}{2}$ of 14 =

Part 5. Half of a number is 1. What is the number?

Part 6. Sofia and Zara share a pack of 16 beads equally. What fraction of the beads did they get each?

THE END
